

# ST. ANDREWS SCOTS SCHOOL

Adjacent Navniti Apartments, I.P. Extension, Patparganj, Delhi-110092

Session 2025-2026

## Class III:- SUMMER HOLIDAY HOMEWORK



## English

- \* Read bed time stories.
- \* Always speak in English.
- \* Complete Cursive writing book.
- \* Make a greeting card on father's day and write a message for father in it.
- \* Observe the given picture and write a paragraph on it. Do it on A4 size sheet.



- \* Complete the pending work.
- \* Revise all the work.
- \* Take printout of the worksheet and do it in English notebook

# **ST. ANDREWS SCOTS SCHOOL**

**Adjacent Navniti Apartments, I.P. Extension, Patparganj, Delhi-110092**

**Session 2025-2026**

**Class- III**

**Worksheet**

**Subject – English Grammar**

## **Q1. Rearrange the following:**

1) picture / is / drawing / a / Vishal

---

2) I / hand / hold / will / your

---

3) outside / hot / is / very / it

---

## **Q2. Rewrite the sentences using capital letters where you think they are necessary.**

1) next month will be july.

---

2) we travelled to england last year.

---

3) ganges is a sacred river.

---

## **Q3. Put commas in the right places.**

1) Divya likes apples bananas oranges and kiwis.

2) Ram Shyam and Rahul are my friends.

3) My favourite subjects are science maths art and music.

4) Would you like to go to mall zoo or beach ?

# ST. ANDREWS SCOTS SCHOOL

Adjacent Navniti Apartments, I.P. Extension, Patparganj, Delhi-110092

Session 2025-2026

Class- III

Worksheet

Subject – Mathematics

- Complete the work of Ch-1 , 2 and 3 in Maths notebook.
- Do practice of Chapter - 1 and 2.
- Learn tables from 2 to 15.
- Paste this worksheet in your Maths notebook.

## Q.1 Multiple Choice Question :

1. The successor of the greatest 4 - digit no. is  
a. 9999 [ ]    b. 10000 [ ]    c. 9998 [ ]
- 2 .What is the sum of IV and XX ?  
a. XXIV [ ]    b. XXV [ ]    c. XXVI [ ]
3. A boy has 147 toffees and a girl has 46 toffees. How many total toffees they have.  
a. 139 [ ]    b. 183 [ ]    c. 193 [ ]

## Q.2 Solve it :

a). Arrange in order :

9909 , 9709 , 9079 , 9007 , 9770

Ascending Order \_\_\_\_\_

Descending Order \_\_\_\_\_

b).Form a number :

6207

Greatest number \_\_\_\_\_ Smallest number \_\_\_\_\_

c).Fill in the blanks :

1. Successor of XXIV = \_\_\_\_\_
2. Predecessor of XIX = \_\_\_\_\_
3. Sum of XV and V = \_\_\_\_\_
4. XXXIX is written as = \_\_\_\_\_

**Q.3 Sums:**

1.

	Th	H	T	O
	○	○	○	
	5	6	3	4
+	2	7	1	9

2.

	Th	H	T	O
	○	○	○	○
	9	8	1	2
—	1	7	5	6

**Q.4 Word Problem :**

A student got 201 marks in Maths Olympiad and 194 marks in English Olympiad. Estimate the total marks ( to the nearest hundreds) . Also find the Actual marks .

**Q.5 Mental Maths :**

1.  $4614 + 0 = \underline{\hspace{2cm}}$

2.  $2719 + \underline{\hspace{2cm}} = 2720$

3.  $1964 + 1345 = 1345 + \underline{\hspace{2cm}}$

4.  $2346 + 2719 + 634 = 2719 + \underline{\hspace{2cm}} + 634$

5.  $9946 + \underline{\hspace{2cm}} = 9946$

**ACTIVITY**

- Make Roman numbers from 1 to 20 using match sticks on A-3 size sheet.

**\* Take printout of the worksheet and do it in Maths notebook**

# **SCIENCE**

- 1.Paste or draw Life cycle of a Hen in your scrap book.( Given on pg no.9)**
  - 2. Let's grow a plant. Soak a few gram or bean seeds overnight.Take them out and sow them in soil. Water them daily. You will observe small plants coming out of seeds in a few days**
  - 3.Make a beautiful collage of herbivorous animals and the food they eat.**
  - 4.Make a mask of your favourite carnivorous animal using a paper plate, colours, pencils,strings buttons, bindis etc.**
  - 5. Read Lesson-1 ,2 ,3 and learn the work done in the class .**  
**( Make a separate science scrapbook and do all the above given work in scrapbook.)**
- \* Take printout of the worksheet and do it in Science notebook.**

# ST. ANDREWS SCOTS SCHOOL

Adjacent Navniti Apartments, I.P. Extension, Patparganj, Delhi-110092

Session 2025-2026

Class- III

Worksheet

Subject -Science

## Q1) Fill in the blanks

- a. \_\_\_\_\_prepares food for the plant
- b. Plants reproduce with the help of \_\_\_\_\_
- c. Living things need \_\_\_\_\_to breathe.
- d. A sparrow lays\_\_\_\_\_.

## Q2) True or False

- a. Roots are green in colour .\_\_\_\_\_
- b. In trees, stem is hard .\_\_\_\_\_
- c. Birds have wings to fly.\_\_\_\_\_
- d. Animals show locomotion.\_\_\_\_\_

## Q3) Circle the odd one

- |           |        |       |         |
|-----------|--------|-------|---------|
| a. Eyes.  | Nose.  | Skin. | Stomata |
| b. Cow.   | Wolf.  | Goat. | Buffalo |
| c. Chair. | Table. | Hen.  | Doll    |
| d. Bird   | Fish.  | Man.  | Insect  |

## Q4). Ques/Ans

- a. Name any two roots that you eat.

Ans. \_\_\_\_\_

- b. Where are stomata present in plants ?

Ans. \_\_\_\_\_

- c. Name the process by which plants make their food.

Ans. \_\_\_\_\_

# Social Studies

**NOTE: Do this holiday homework in your scrap book**

## **PART- A: ACADEMICS**

### **WRITING**

**Q1.** Read the clues and name these:-

- i) A large area of land on the earth - \_\_\_\_\_.
- ii) Bowl shape depression on the surface of moon - \_\_\_\_\_.
- iii) Drawing of a place on a flat surface - \_\_\_\_\_.
- iv) A layer of air around the earth - \_\_\_\_\_.

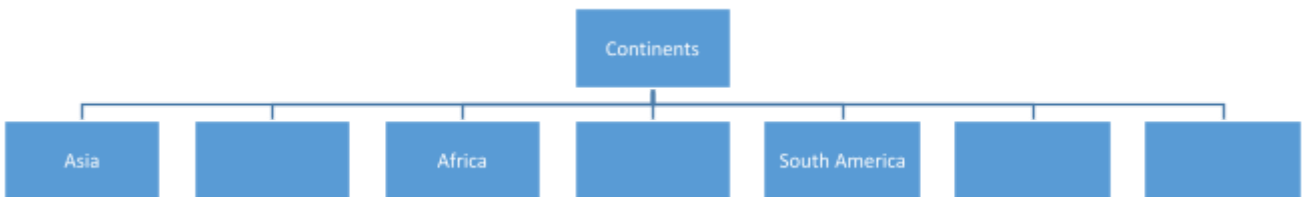
**Q2.** Your uncle who stays in a village has come to your house. His small son sees the globe and asks you about it. Write few lines how will you explain him about Globe and draw diagram too?

### **LEARNING**

**Q3.** Learn all the chapters done in class.

## **PART- B: ACTIVITY**

**Q4.** Complete the following flow-chart.



**Q5.** Environment day is celebrated on 5<sup>th</sup> June every year. Make a poster for the same and write an attractive slogan also.

# ST. ANDREWS SCOTS SCHOOL

Adjacent Navniti Apartments, I.P. Extension, Patparganj, Delhi-110092

Session 2025-2026

Class- III

Worksheet

Subject –Social Studies

## Q1. Choose the correct answer:

- i) A book of maps is called an \_\_\_\_\_.
  - a) a dictionary
  - b) an atlas
  - c) an encyclopedia
- ii) Magellan proved that the Earth is \_\_\_\_\_.
  - a) round
  - b) square
  - c) rectangle

## Q2. Answer in one word:

- i) True model of the Earth \_\_\_\_\_.
- ii) An instrument used to find directions \_\_\_\_\_.

## Q3. Fill in the blanks:

- i) The Earth has a \_\_\_\_\_ shape like an orange.
- ii) \_\_\_\_\_ is the largest continent.

## Q4. Define:

- i) Atmosphere -

---

---

- ii) Map -

---

---

## Q5. Unscramble the letters to form the correct words:

- i) This is known as the white continent: (NTAARCITCA)- \_\_\_\_\_.
- ii) This is a continent and a country: (USARATLIA)- \_\_\_\_\_.
- iii) This is the largest ocean in the world: (ACIPFIC)- \_\_\_\_\_.
- iv) This is the smallest ocean in the world: (RCATIC) - \_\_\_\_\_.

**\* Take printout of the worksheet and do it in Social Studies notebook.**

# सेंट एंड्रयूज़ स्कॉट्स स्कूल

आई.पी.एक्सटेंशन, पटपड़गंज, दिल्ली – ११००९२

सत्र: २०२५-२६

कक्षा:-तीसरी विषय:- हिंदी(व्याकरण) पाठ-१,२ (कार्यपत्रिका)

प्रश्न 1) हिंदी पाठ्यपुस्तक "निहारिका" का एक पेज प्रतिदिन पढ़ें ।

प्रश्न 2) पेड़ का चित्र बनाकर उसमें दिनों और महीनों के नाम हिंदी में लिखिए ।

प्रश्न 3) हिंदी में 1 से 10 तक गिनती लिखें।

प्रश्न 4) कक्षा में अब तक कराया गया सभी कार्य कॉपी में पूरा कीजिए तथा याद कीजिए ।

प्रश्न दो तथा तीन को **A4** साइज शीट पर कीजिए ।

\*कार्य पत्रिका का प्रिंटआउट निकाल कर उसे पूरा करें तथा कॉपी में चिपकाएँ ।

1. रिक्त स्थान भरिए।

क) हिंदी भाषा की लिपि \_\_\_\_\_ होती है।

ख) स्वर और व्यंजनों को मिलाकर लिखने पर \_\_\_\_\_  
बनती है।

ग) हिंदी में वर्ण के \_\_\_\_\_ प्रकार होते हैं।

घ) वर्णमाला में पहले स्वर फिर \_\_\_\_\_ आते हैं।

ड.) भाषा के \_\_\_\_\_ रूप होते हैं।

च) संयुक्त व्यंजनों की संख्या \_\_\_\_\_ है ।

प्र०-2. भाषाओं को उनकी लिपि से मिलाइए।

क) हिंदी	रोमन
ख) अंग्रेज़ी	गुरुमुखी
ग) उर्दू	देवनागरी
घ) पंजाबी	फ़ारसी

प्र०-3. कहाँ कौन-सी भाषा बोली जाती है ? चुनकर लिखिए -

क) गुजरात - \_\_\_\_\_

(पंजाबी/गुजराती)

ख) उत्तर प्रदेश - \_\_\_\_\_

(हिंदी/तमिल)

ग) जापान - \_\_\_\_\_


(चीनी/जापानी)

घ) अमेरिका - \_\_\_\_\_

(अंग्रेज़ी/हिंदी)

प्र०-4. हाथी की पीठ पर स्वर और व्यंजन मिल गए हैं,

इन्हें अलग-अलग लिखिए



स्वर - \_\_\_\_\_

व्यंजन - \_\_\_\_\_

# COMPUTER

## ST. ANDREWS SCOTS SCHOOL

Adjacent Navniti Apartments, I.P. Extension, Patparganj, Delhi-110092

Session 2025-2026

Class- III

Worksheet

Subject –Computer

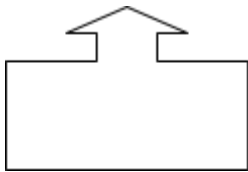
### Q1. Fill in the blanks:

- Window10 is an operating system developed by\_\_\_\_\_.
- Grammatical mistakes are shown as in\_\_\_\_\_coloured wavy lines.
- \_\_\_\_\_is the default font style and \_\_\_\_\_is the default font size.
- The long bar at the bottom of the desktop called\_\_\_\_\_.

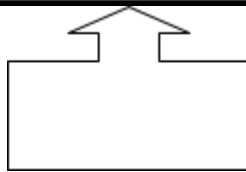
### Q2. Find the button which has been applied in the sentence and draw in the white box



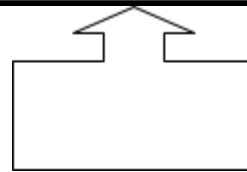
Godiswatchingyouall the  
time.



Godiswatchingyouallthe  
time.



Godiswatchingyouall the  
time.



### Q3. Find the name of the buttons in the word search with the help of clues given below:

F	O	N	T	Z	Q	E	X	T
L	K	J	B	A	N	X	Z	H
W	N	B	H	P	A	S	T	E
B	J	U	S	T	I	F	Y	S
Z	G	L	M	E	S	S	R	A
A	U	L	T	P	B	W	Y	U
D	E	E	A	U	M	T	O	R
H	J	T	Z	B	C	Q	R	U
U	P	P	E	R	C	A	S	S

- Calibri
- A type of alignment
- Symbols in front of a list
- The button used after Cut or Copy
- To find synonym for a word
- **Q.4 Do Periodic Assessment1 (Based on Ch-1 and 2) in book pg-37**

### **ACTIVITY**

**Roll no.1to10**-Make Flash Cards (Any 2 icons)

- THISPC
- RECYCLE BIN
- STARTBUTTON
- FOLDER
- CLOCK

**Roll no.11to20**-Which app or game do you like using on the computer (like paint, Calculator, or a game)?Write the name of the app, and draw its icon and what you do in it?  
(Use coloured A4 size sheet)

**Roll no.21to30**-Draw Alignments on A-4 size sheet

- Align Left
- Align Right
- Center
- Justify

**Roll no.31toLast Roll No**-Make Flash cards(Any 2 Mouse pointer shapes)

- Busy
- Normal Select
- Double-headed Arrow
- Four-headed Arrow
- Text Select

**\* Take printout of the worksheet , solve it and keep it in a folder.**

## **Art & Craft**

- \*Craft - Draw your favourite cartoon on A2 size sheet and bring cutout .**
- \*Complete page no. 3-20 of Fusion and Fission Art and Craft Book.**

## **Library**

### **Reading Activity**

- 1. Develop a habit of reading bedtime stories.**
- 2. Read 5 fairy tales and:**
  - Identify new words with their meanings (daily).**
  - Note down the new words and their meanings in a thin notebook (₹5).**

**\*This activity will help you improve your vocabulary and comprehension skills while enjoying engaging stories!**